


Bài 12

BẢNG CỘNG, BẢNG TRỪ

TRONG PHẠM VI 10

TIẾT 1




Khám phá

Bảng cộng




$$1 + 6 = 7$$




$$2 + 5 = 7$$




$$3 + 4 = 7$$



$$4 + 3 = 7$$



$$5 + 2 = 7$$



$$6 + 1 = 7$$

2

Em hoàn thành bảng cộng

$1 + 1 = 2$	$2 + 1 = 3$	$3 + 1 = 4$	$4 + 1 = 5$	$5 + 1 = 6$	$6 + 1 = 7$	$7 + 1 = 8$	$8 + 1 = 9$	$9 + 1 = 10$
-------------	-------------	-------------	-------------	-------------	-------------	-------------	-------------	--------------

$1 + 2 = 3$	$2 + 2 = 4$	$3 + 2 = 5$	$4 + 2 = 6$	$5 + 2 = 7$	$6 + 2 = 8$	$7 + 2 = 9$	$8 + 2 = 10$
-------------	-------------	-------------	-------------	-------------	-------------	-------------	--------------

$1 + 3 = 4$	$2 + 3 = 5$	$3 + 3 = 6$	$4 + 3 = 7$	$5 + 3 = 8$	$6 + 3 = 9$	$7 + 3 = 10$
-------------	-------------	-------------	-------------	-------------	-------------	--------------

$1 + 4 = 5$	$2 + 4 = 6$	$3 + 4 = 7$	$4 + 4 = 8$	$5 + 4 = 9$	$6 + 4 = 10$
-------------	-------------	-------------	-------------	-------------	--------------

$1 + 5 = 6$	$2 + 5 = 7$	$3 + 5 = 8$	$4 + 5 = 9$	$5 + 5 = 10$
-------------	-------------	-------------	-------------	--------------

$1 + 6 = 7$	$2 + 6 = 8$	$3 + 6 = 9$	$4 + 6 = 10$
-------------	-------------	-------------	--------------

$1 + 7 = 8$	$2 + 7 = 9$	$3 + 7 = 10$
-------------	-------------	--------------

$1 + 8 = 9$	$2 + 8 = 10$
-------------	--------------

$1 + 9 = 10$



3

Tìm cánh hoa cho mỗi chú ong

